



Use the units provided to measure the width of each of the bars.



Answers

1. \_\_\_\_\_

2. \_\_\_\_\_

3. \_\_\_\_\_

4. \_\_\_\_\_

5. \_\_\_\_\_

6. \_\_\_\_\_

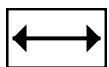
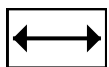
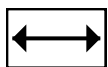
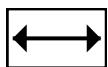
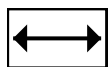
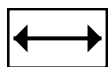
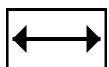
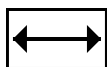
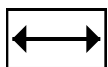
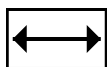
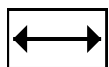
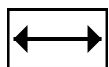
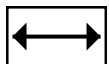
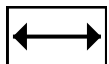
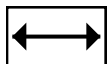
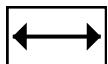
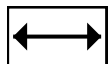
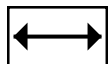
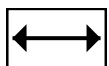
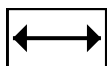
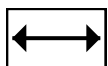
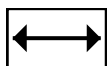
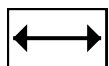
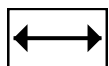
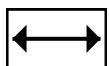
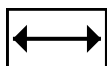
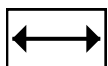
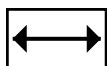
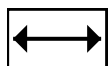
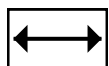
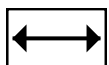
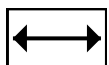
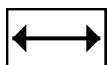
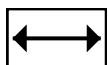
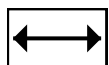
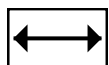
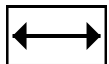
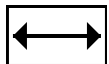
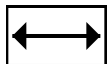
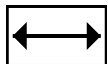
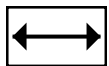
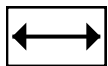
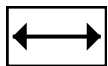
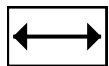
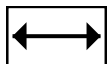
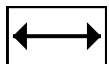
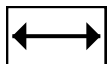
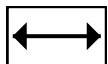
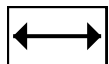
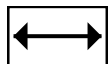
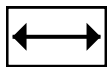
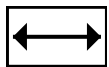
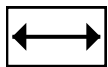
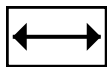
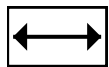
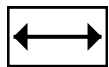
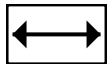
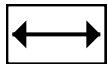
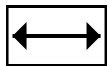
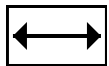
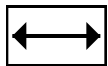
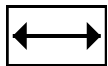
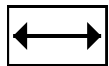
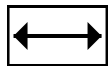
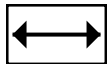
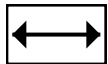
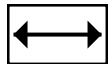
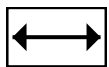
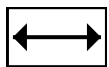
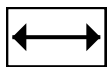
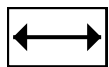
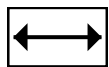
7. \_\_\_\_\_

8. \_\_\_\_\_

9. \_\_\_\_\_


10. \_\_\_\_\_

Cut out and use the units shown to measure the bars on the previous page.





Use the units provided to measure the width of each of the bars.



Answers

1. 3

2. 9

3. 8

4. 1

5. 7

6. 5

7. 2

8. 11

9. 4

10. 10